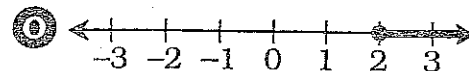
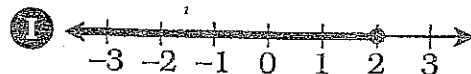


What Is The First Thing You Should Do To Become a Mattress Maker?

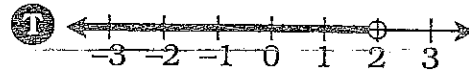
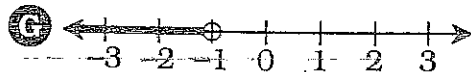
For each exercise, write the letter of the answer in the box containing the number of the exercise.

In Exercises 1-6, match the inequality with its graph.

1 $x < 2$



2 $x \leq 2$

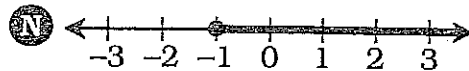
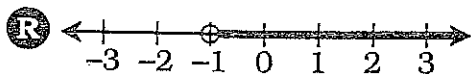


3 $x > -1$

4 $x \geq -1$

5 $-1 > x$

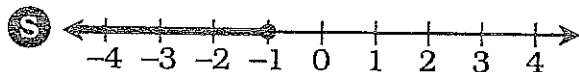
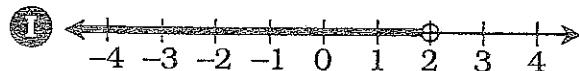
6 $2 \leq x$



In Exercises 7-18, solve the inequality. Then graph the solution.

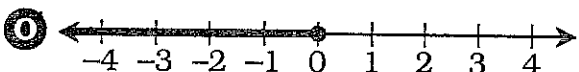
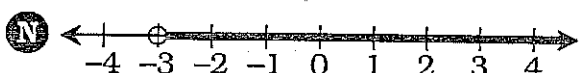
7 $3n + 1 < 10$

8 $5a - 2 \geq 8$



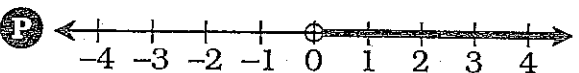
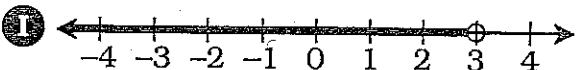
9 $4y + 7 \leq 3$

10 $9k - 2 > -20$



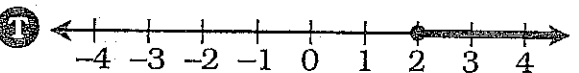
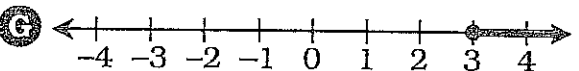
11 $\frac{x}{2} + 15 < 16$

12 $\frac{d}{3} - 8 \geq -10$



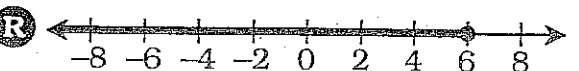
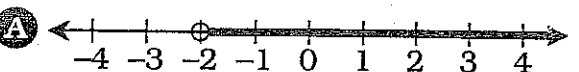
13 $\frac{u}{9} - 4 \leq -4$

14 $6p - 15 < 33$



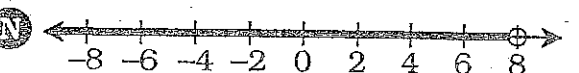
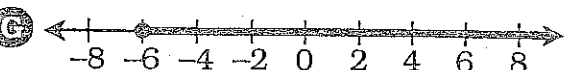
15 $17 \leq 5b + 2$

16 $-23 < 8y + 1$



17 $-6 \geq \frac{x}{6} - 7$

18 $5 < \frac{m}{12} + 5$



15	6	1	13	9	18	3	11	14	5	8	17	10	2	16	7	4	12
----	---	---	----	---	----	---	----	----	---	---	----	----	---	----	---	---	----