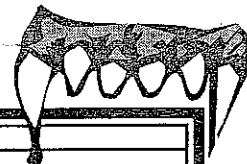



# DID YOU HEAR ABOUT THE . . .

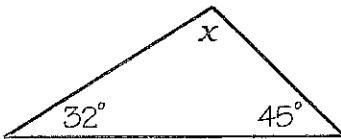
1	2	3	4	5
6	7	8	9	10 ?

Solve each problem and find your answer in the answer column. Write the word next to the answer in the box containing the problem number.



- Matt is thinking of a number. The sum of this number and 7.5 is 38.2. Find Matt's number.
- Jen is thinking of a number. The product of this number and 3.4 is 176.8. Find Jen's number.
- Dan is thinking of a number. The quotient of this number and 1.8 is 31.5. Find Dan's number.
- Amy is thinking of a number. This number decreased by 18.8 is 77.2. Find Amy's number.
- Zuma earns \$12.50 an hour. How many hours must she work to earn \$500?
- Zork goes running four days a week. His goal is to run a total of 25 miles. So far this week he has run 6.7, 4.5, and 7.0 miles. How far must he run on the fourth day?
- The length of a rectangle is 3 times the width. The perimeter is 65.6 cm. Find the width.
 

$x$ 

- One-third of the students at Maxx Middle School play a musical instrument. If 152 students play an instrument, how many students are at the school?
- The sum of the angle measures of a triangle is  $180^\circ$ . Find the measure of the angle marked with an  $x$ .
 


- Mr. Mustard had \$185 deducted from his earnings for taxes. If he had \$576 left after the deduction, how much did he earn?

428 • FANGS

96 • IN

8.2 cm • THE

\$742 • SPOOK

30.7 • VAMPIRE

37.5 h • TROUBLE

\$761 • DOOR

9.4 cm • BLOOD

40 h • LOVE

52 • WHO

456 • GIRL

56.7 • FELL

7.1 mi • BECAUSE

$98^\circ$  • GOBLIN

6.8 mi • WITH

$103^\circ$  • NECKS

92.4 • GOING